



Determine which letter best represents the sum.

1) $\frac{3}{4} + \frac{3}{4}$

3) $\frac{1}{6} + \frac{1}{6}$

5) $\frac{6}{12} + \frac{3}{12}$

7) $\frac{3}{6} + \frac{5}{6}$

9) $\frac{1}{3} + \frac{2}{3}$

11) $\frac{5}{8} + \frac{7}{8}$

13) $\frac{1}{8} + \frac{2}{8}$

2) $\frac{1}{5} + \frac{3}{5}$

4) $\frac{3}{10} + \frac{3}{10}$

6) $\frac{7}{12} + \frac{5}{12}$

8) $\frac{1}{2} + \frac{1}{2}$

10) $\frac{4}{10} + \frac{3}{10}$

12) $\frac{2}{6} + \frac{5}{6}$

14) $\frac{4}{6} + \frac{2}{6}$

Answers

1. _____

2. _____

3. _____

4. _____

5. _____

6. _____

7. _____

8. _____

9. _____

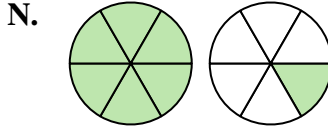
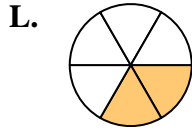
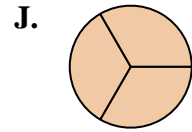
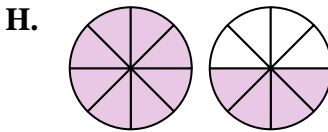
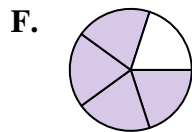
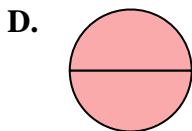
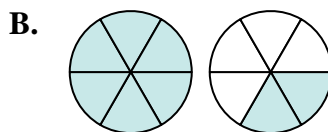
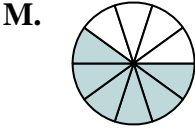
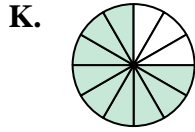
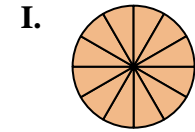
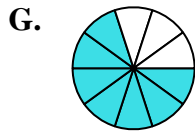
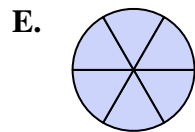
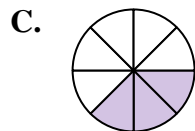
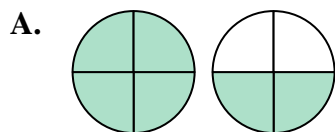
10. _____

11. _____

12. _____

13. _____

14. _____





Determine which letter best represents the sum.

1) $\frac{3}{4} + \frac{3}{4}$

3) $\frac{1}{6} + \frac{1}{6}$

5) $\frac{6}{12} + \frac{3}{12}$

7) $\frac{3}{6} + \frac{5}{6}$

9) $\frac{1}{3} + \frac{2}{3}$

11) $\frac{5}{8} + \frac{7}{8}$

13) $\frac{1}{8} + \frac{2}{8}$

2) $\frac{1}{5} + \frac{3}{5}$

4) $\frac{3}{10} + \frac{3}{10}$

6) $\frac{7}{12} + \frac{5}{12}$

8) $\frac{1}{2} + \frac{1}{2}$

10) $\frac{4}{10} + \frac{3}{10}$

12) $\frac{2}{6} + \frac{5}{6}$

14) $\frac{4}{6} + \frac{2}{6}$

Answers

1. **A** $1\frac{2}{4}$

2. **F** $\frac{4}{5}$

3. **L** $\frac{2}{6}$

4. **M** $\frac{6}{10}$

5. **K** $\frac{9}{12}$

6. **I** $\frac{12}{12}$

7. **B** $1\frac{2}{6}$

8. **D** $\frac{2}{2}$

9. **J** $\frac{3}{3}$

10. **G** $\frac{7}{10}$

11. **H** $1\frac{4}{8}$

12. **N** $1\frac{1}{6}$

13. **C** $\frac{3}{8}$

14. **E** $\frac{6}{6}$

